

Area of Parallelograms

What are the areas?
Remember units. Draw the height first.

①



②




③



④




⑤



⑥




⑦



⑧



⑨



⑩

